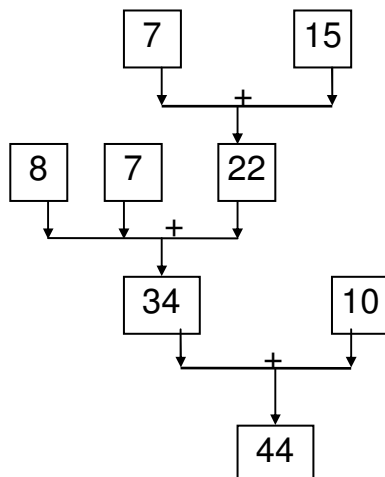
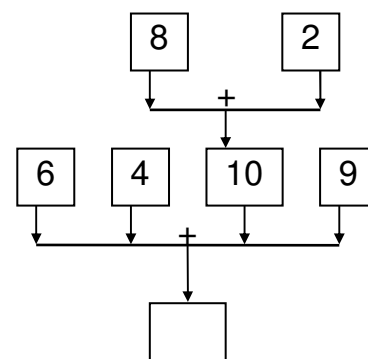
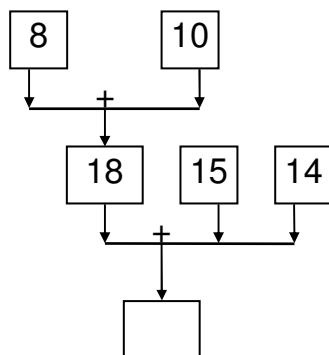
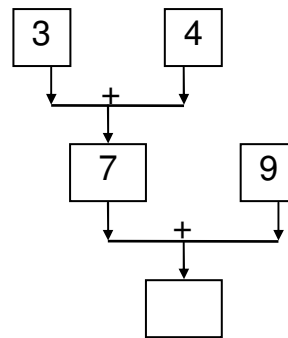
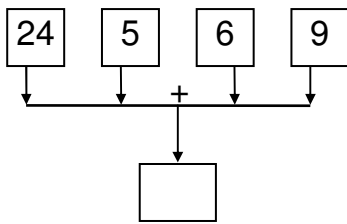


Costruisci l'espressione aritmetica relativa ai seguenti schemi.



Costruisci lo schema relativo alle seguenti espressioni

- $2 + 7 + 9 + 15 =$
- $(24 + 6 + 5) + 10 + 1 =$
- $[(2 + 3) + 8] + 10 + 17 =$
- $27 + 4 + [9 + (1 + 2) + 3] + 16 =$

"Inventa" 5 espressioni e costruisci i relativi grafici

"Inventa" 5 schemi e costruisci le relative espressioni

An Expression Tree Builder and Evaluator
ww0.java4.datastructures.net/animations.html